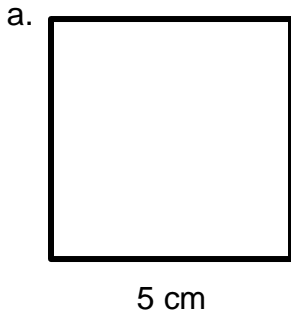


2021 WORKSHEET 9

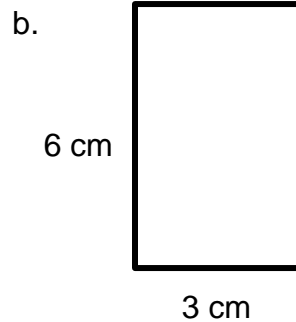
NUMERACY YEAR 6

Answer all the questions in the Mathematics Activity book.

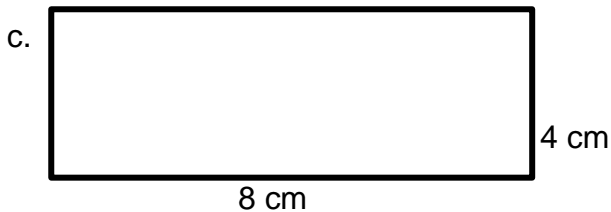
1. Calculate the perimeters of the following shapes.



(2 marks)



(2 marks)



(2 marks)

2. Complete the table by calculating the perimeter of squares using the given measurements. Show all necessary working.

Length of one side of the square	Perimeter
6 cm	
8 cm	
10 cm	

(6 marks)

3. Complete the table by calculating the perimeter of rectangles using the given measurements. Show all necessary working.

Length	Width	Perimeter
4 cm	2 cm	
7 cm	3 cm	
12 cm	5 cm	

(6 marks)